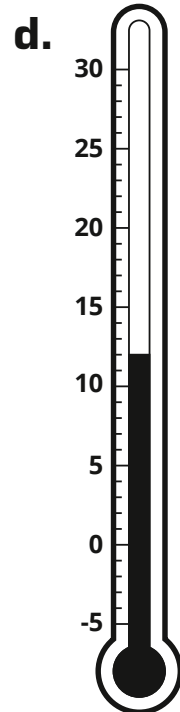
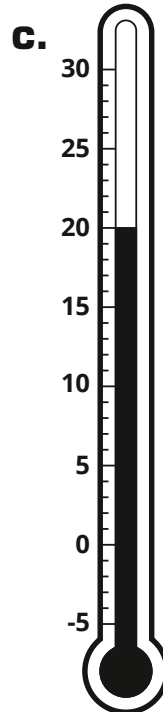
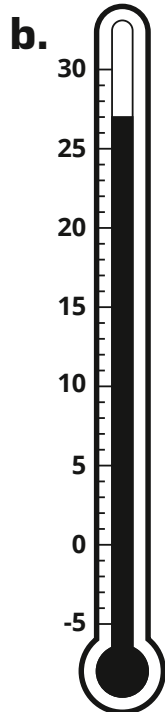
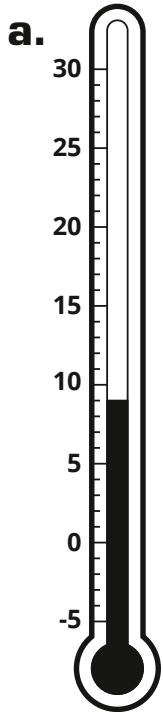


Temperature

I can:

- Measure temperature.
- Compare and order temperatures and record the results using $>$ and $<$.

1. Write the temperature.



2. Order the temperatures in Question 1 from **coolest** to **warmest**.

coolest

warmest

3. Complete. Choose $>$ or $<$.

a. 17°C 21°C

b. 13°C 7°C

c. 22°C 0°C

d. 15°C 11°C